

Section - A (Reading skills)

(8)

I. Read the passage and answer the questions given below.

A desert is not always a flat, unchanging waste land of dry sand. It may have mountains and hills. It may have an oasis, big or small. An oasis is like a green island in the middle of a desert where a spring or a well gives plants and trees a better chance to grow. A desert may be hot like the Thar or cold like Ladakh. But, generally speaking, if a place has little or no water and vegetation, people usually call it a desert. Some deserts are almost totally without water. In such places, strong winds blow raising heaps of sand and depositing them as mounds. These are called sand dunes that shift and move endlessly across the desert. Few plants can survive on such dry, shifting sands.

1. Complete the following sentences by picking the answer from the choice given:

a) The Thar is _____.

- (i) a cold desert (ii) a hot desert
(iii) a beautiful desert (iv) a dangerous desert

b) An oasis is like _____.

- (i) a green island in the middle of a desert
(ii) a Dry island (iii) a island with water
(iv) a sandy island

c) A desert means _____

- (i) a large part of land where there is no water
(ii) a large part of land where there is no plantation
(iii) a large part of land where there is heat
(iv) a large part of land where there is sand, no vegetation and no water

d) There are sand dunes that _____.

- (i) shift and move endlessly the (ii) shift earth from one place to another in the desert
(iii) shift stones on the desert (iv) shift water on the desert

e) The word wasteland means _____.

- (i) where we can grow many plants (ii) where we can't grow any plants easily
(iii) the useless land (iv) the useful land

(f) Write the synonyms of :

- i) waste - ii) usually

g) Make a sentence of :

- i) desert -

Section B (Writing skills)

II. Write a paragraph on Importance of Education /5

(or)

Write a letter to your grandfather thanking him for the wonderful cycle he gifted you on your 10th birthday.

III Write few sentences (in Paragraph) for the picture given below:

(5)



IV Develop the given story-

/5

A poor cobbler..... earned a bare living.....but happy and contented..... his neighbour had plenty of money, but was not happy..... wondered how the cobbler could be so happy..... questioned him..... he replied that he was content with what he had.... rich man gave him five thousand rupees as present..... cobbler became unhappy from that time... afraid that the money would be stolen..... could not sleep..... returned the money to the rich man.

Section - C (Grammar)

V. Fill in the blanks with suitable pronoun:

(5x1=5)

1. _____ grapes are sour.
2. _____ team won the match.
3. Nidhi is a nice girl. _____ is my friend.
4. Mrs Kara is very clever. _____ speaks French.
5. He always performs _____ duties well.

VI. Fill in the blanks with suitable conjunctions:

(3x1=3)

1. You must drive fast _____ you want to reach in time.
2. He is wise _____ his brother is foolish.
3. The baby is crying _____ it is hungry.

VII Join the sentences with suitable conjunctions:

(2x1=2)

1. I cannot lift the box. It is very heavy .
2. I took part in the race. I did not win any prize.

VIII. Fill in the blanks with suitable articles:

(4x1=4)

1. The crow had _____ piece of cheese in his beak.
2. There is _____ bridge on _____ river.
3. Both _____ girls are very pretty.

IX. Write the synonyms of _____ .

(1x5=5)

1. allow -
2. correct-
3. glad-
4. injure-
5. enough

X. Fill in as directed:

(1x6=6)

1. I _____(take) my dog for a walk everyday. (Simple present tense)
2. She _____(go) to hill station every summer. (Simple present negative)
3. Wood always _____(float) on water. (Simple present tense)
4. He _____ (forget) to give his name and address. (Simple past tense)
5. They _____(build) this house in 1995. (Simple past negative)
6. _____Sachin _____(like) the film? (simple past interrogative)

Section - D (Literature)

XI. Write the meanings of:

(3x1=3)

challenge, dearly, puzzled,

XII. Make sentences: tickle, fluently

(2x1=2)

XIII. Who said to whom :

(2x1=2)

1. " In times of difficulty, a person speaks only his mother tongue. "
- 2." The problem is, how can we reach her? She is locked up inside herself. "

XIV. Write two - two Rhyming words for the given words :

(2x1=2)

heat , hard

XV. Complete the poem

(2x1=2)

Early in the morning

Are the times to water

XVI. Answer the questions briefly. :

(4x2=8)

Q1. What was the name of Helen's teacher?

Q2. Who visited the court of Akbar?

Q3. Which language do one speak in times of difficulty?

Q4. Where did the naughty boy run away?

Q5. What did the carpenter bring one day?

XV. Answer in detail : (any one)

(1x3=3)

Q1. Should we speak a lie? What happens when one speaks a lie?

Q2. How did Birbal find the truth ?

XVI. Dictation.

(5x1=5)

XVI. General Awareness :

(5x1=5)

1. Which God is Arjuna's father in the Mahabharata?
2. What is the rank given to our school by D1.Magazine recently ?
3. Who originally wrote the Ramayana?
4. What is the name of the new educational programme being introduced in your School?
5. Who is the D. M of Ghaziabad?

J.K.G. INTERNATIONAL SCHOOL, VIJAY NAGAR GHAZIABAD
ANNUAL ASSESSMENT 2017-18
PRACTICE PAPER
CLASS – IV

TIME: 3Hrs.

SUB: HINDI

M.M: 80

निर्देश— (क) सभी प्रश्न करने अनिवार्य है।

(ख) प्रश्नों को ध्यान से पढ़कर प्रश्नों के उत्तर –उत्तर पुस्तिका में स्वच्छता से दीजिए।

(ग) उत्तर पुस्तिका का विवरण भी लिखिए।

खण्ड – क (अपठित)

प्र०.1 अपठित गद्यांश को ध्यान से पढ़िए और पूछे गए प्रश्नों के उत्तर सही विकल्प छोट कर दीजिए –

5

विद्यार्थी के जीवन में अनुशासन का विशेष महत्व है। जो विद्यार्थी समय से अपने सारे काम करता है और अनुशासन से रहकर पढ़ाई करता है वह सफलता प्राप्त करता है। अनुशासित विद्यार्थी ही सबका प्रिय होता है। अनुशासन की शुरुआत प्रारंभ परिवार से होती है। विद्यालय में इसका विकास होता है। सच्चा अनुशासन मनुष्य को पशुता से ऊपर उठाकर मनुष्य बनाता है। अनुशासनहीन व्यक्ति का जीवन जटिलताओं से परिपूर्ण और उद्देश्यहीन हो जाता है।

1. विद्यार्थी जीवन में किसका विशेष महत्व है?

(क) अनुशासन () (ख) विद्या () (ग) ज्ञान ()

2. कैसा विद्यार्थी सबका प्रिय होता है?

(क) शरारती () (ख) विजयी () (ग) अनुशासित ()

3. अनुशासनहीन व्यक्ति का जीवन कैसा होता है?

(क) सुगम () (ख) सरल () (ग) जटिलताओं से भरा ()

4. अनुशासन की शुरुआत कहाँ से होती है?

(क) समाज () (ख) परिवार () (ग) विद्यालय ()

5. सफलता का विलोम है?

(क) असफलता () (ख) विफल () (ग) समानता ()

खण्ड 'ख' (व्याकरण)

प्र०.2 सही सर्वनाम शब्द पर सही का निशान लगाइए।

4

1. यह मेरा घर है।

निजवाचक () प्रश्नवाचक () सम्बन्धवाचक ()

2. क्या तुम स्कूल जा रहे हो?

सम्बन्धवाचक ()

निश्चयवाचक ()

प्रश्नवाचक ()

3. हमें स्कूल का सब कार्य स्वयं करना चाहिए।

पुरुषवाचक ()

प्रश्नवाचक ()

निजवाचक ()

4. मैं खेलने जा रहा हूँ।

प्रश्नवाचक ()

पुरुषवाचक ()

निजवाचक ()

प्र०.3 सही पर सही का और गलत पर गलत का निशान लगाइए।

5

1. विशेषण के तीन भेद होते हैं।

2. परिमाणवाचक विशेषण से संज्ञा के गुण का पता चलता है।

3. संख्यावाचक विशेषण से संज्ञा की माप— तौल का पता चलता है।

4. सर्वनाम के चार भेद हैं।

5. किसी व्यक्ति या वस्तु की हमें सही जानकारी हो, उसे अनिश्चयवाचक सर्वनाम कहते हैं।

प्र०.4 निम्न शब्दों के दो-दो पर्यायवाची शब्द लिखिए।

4

1. नदी

2. चाह

3. कपड़ा

4. शिक्षक

प्र०.5 अनेक शब्दों के लिए एक शब्द लिखिए।

4

1. जो गूँगा हो।

2. शिक्षा देने वाला।

3. साथ पढ़ने वाला।

4. जो सदा सत्य बोलता हो।

प्र०.6 दिए गए क्रिया शब्दों के सही रूप से वाक्य पूरे कीजिए।

4

1. राम ने खाना _____।

2. अध्यापिका ने बच्चों को _____।

3. मैं रोज़ पार्क में _____ हूँ।

4. मैंने मित्र को पत्र _____।

प्र०.7 निम्न मुहावरों के अर्थ लिखिए।

4

1. चल बसना—

2. पानी—पानी होना—

3. घोड़े बेचकर सोना—

4. छक्के छुड़ाना—

खण्ड 'ग' (पाठ्य पुस्तक)

प्र०.8 निम्न शब्दों के अर्थ लिखिए।

5

1. जलसे

2. प्रामाणिक

3. सूचक

4. हास—हुलास

5. अपमानित

प्र०.9 लघु प्रश्न के उत्तर दो।

4

1. सुबह—सुबह राजकुमार गुरुजी से क्या माँगने गया?

2. साँझ होते ही स्त्रियाँ किसकी पूजा करती हैं?
3. आंद्रे विसेलियस का जन्म कब और कहाँ हुआ था?
4. पंडाल किस मैदान में बनाया गया था?

प्र०.10 विस्तृत प्रश्न के उत्तर दो।

6

निम्न में से किन्हीं भी तीन प्रश्नों के उत्तर दीजिए।

1. दशरथ माँझी को किस खिताब व पद से सम्मानित किया गया था?
2. आंद्रे के परिवार के लोग कैसे थे और वे क्या काम करते थे?
3. अगले दिन पोंगल किस रूप में और कैसे मनाते हैं?
4. शरद ऋतु में धूप का रंग कैसा हो जाता है?

प्र०.11 मूल्यपरक प्रश्न।

2

1. क्या आपने कभी कोई ऐसा काम किया, जिसके लिए आपको प्रशंसा मिली हो ? वर्णन कीजिए।

प्र०.12 किसने किससे कहा?

3

1. "तुम्हें मेरे साथ आधी रात के समय कब्रिस्तान चलना होगा।"
2. " वत्स, इतनी शिक्षा बाकी रह गई थी।"
3. " कौन है" आप और यह क्या शाबाश-शाबाश लगा रखा है।

प्र०.13 खाली स्थान भरिए।

5

1. गुरु जी का नाम _____ था।
2. पोंगल पर एक विशेष _____ खरीदा जाता है।
3. आंद्रे के दोस्त का नाम _____ था।
4. बिहार की राजधानी _____ है।
5. माँझी को सड़क बनाने में _____ बरस लगे।

प्र०.14 कविता की पंक्तियाँ पूरी करिए।

5

भरी है _____ की डाल
 _____ नई से _____
 कर रही बेला का _____
 जगत में _____ हास-हुलास

प्र०.15 श्रुतलेखन।

5

खण्ड 'घ'

प्र०.16 किसी एक विषय पर अनुच्छेद लिखिए।

5

अनुशासन या अपना प्रिय खेल

प्र०.17 किसी एक विषय पर पत्र लिखिए।

5

होली के त्योहार की शुभकामनाएँ देते हुए अपने मित्र को पत्र।

या

चाचा जी की शादी में जाने के लिए 4 दिन की छुट्टी के लिए प्रधानाचार्या को पत्र।

प्र०.18 सामान्य ज्ञान प्रश्न।

5

1. हिन्दी दिवस कब मनाया जाता है?
2. गाजियाबाद के नवनिर्वाचित मेयर कौन हैं?
3. भारत में कितनी भाषाओं को मान्यता प्राप्त है?
4. भारत के प्रथम प्रधानमंत्री का नाम बताइए?
5. 'राष्ट्रगीत' वंदेमातरम् किसने लिखा है?

J.K.G. INTERNATIONAL SCHOOL VIJAY NAGAR

SAMPLE PAPER FOR ANNUAL EXAM (2017-18)

SUBJECT – MATHS

CLASS – IV

Time 3 hrs.

M.M. 80

Instructions :

- All questions are compulsory.
- Read carefully and do neatly
- The question paper consists of 30 questions divided into 5 sections
- **Section A** contains 5 questions of 1 mark each , **Section B** contains 7 questions of 2 marks each , **section C** contains 8 questions of 3 marks each , **Section D** contains 8 questions of 4 marks each , **Section E** –General Awareness(Reasoning) contains 2 questions of 5 marks

SECTION – A


(5 X 1)

- Q.1.** How many 5 rupee notes make a sum of Rs.500?
- Q.2.** The data is represented by using the pictures is called _____
- Q.3.** Which is the largest chord of the circle ?
- Q.4.** How many lines of symmetry does a equilateral triangle have ?
- Q.5.** 1 leap year = _____ days

SECTION – B

(7X 2)

- Q.6.** Convert Rs.124.25 into paise .
- Q.7.** Draw a triangle and name its sides and angles.
- Q.8.** Draw the line of symmetry in the given figure




Q.9. Draw a circle with diameter 8 cm .

Q.10 Find the perimeter of triangle whose sides are 21 Cm , 24cm and 30 cm ..

Q.11. Find the Area of the rectangle whose length is 30 cm and breadth is 18cm.

Q.12. Find the missing value if the perimeter is 40 cm and length is 14cm.



?

SECTION – C

(8 X 3)

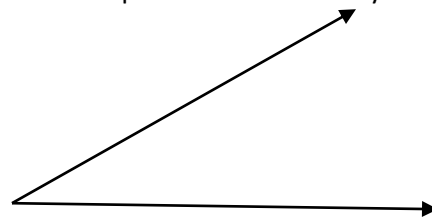
Q.13. (a) Check whether 2001 was leap year or not ?

(b). Deepak painted 28 m of a wall in 7 days . How much did he paint in the first 4 days?

Q.14. From the given figure , list the points which are

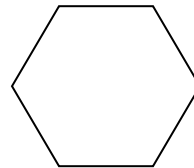
(a) In the exterior of angle ABC

(b) In the interior of angle of angle ABC



Q.15. Find perimeter whose each side is 15 cm.

Q.16. Subtract Rs. 560.90 from Rs. 600



Q.17. Deepak painted 28 m of a wall in 7 days . How much did he paint in the first 4 days?

Q.18. Add : 5 hours 35 min and 15 hours 40 min .

Q.19. The information given below is about the number of bats produced on different days of a week by ABC bat company . Draw the pictograph by using the information .

Day	Monday	Tuesday	Wednesday	Thursday	Friday
Number of bats produced	85	70	60	80	45

Q.20 (a) Draw the net of a cube .

(b) Subtract 3 hours 15 min from 12 hours 40 min .

SECTION – D

Q.21. Draw a quadrilateral PQRS . Name its (a) Sides (b) Vertices (c) Opposite sides (d) Diagonals

Q.22. Find the perimeter and area of a rectangle whose length is 18 cm and breadth is 12 cm

Q.23. (a) If 8 books cost Rs. 720.80 . What is the cost of 1 book?

(b) What should be added to Rs. 97.50 to get Rs. 150.00?

Q.24. My school is closed for summer vacation from 17 th may 2014 onwards and reopened after 45 days . When did my school reopen?.

Q.25. (a) Convert 280 seconds into minutes and seconds.

(b) Add Rs. 105.30 and Rs. 193.50

Q.26. Draw the line of symmetry in alphabets (a) having horizontal line of symmetry

(b) vertical line of symmetry (c) no line of symmetry

Q.27. The bar graph given below shows the various activities in which students participated during the summer holidays

(a) What information does the graph represent ?

(b) Which activity was the most popular ? How many students participated in this activity ?

(c) How many students took part in public speaking ?

(d) What was the total number of students who participated in various activities ?

Q.28. . 15 shirts cost RS. 4875 . How much should one pay for 35 such shirts ?

SECTION – E

(5)

Q.29 In a quiz competition , each students was required to answer 50 questions . 5 marks were given for every correct answer and 3 marks were deducted for each wrong answer . If rohan answered 42 Questions correctly , then his total marks is

(a) 210 (b) 186 (c) 84 (d) 190

Q.30. In a number 5904627813 first and sixth digits are interchanged : and similarly the position of second and seventh digits and so on are interchanged . which of the following will be the 4th digit from the right after new arrangement?

(a) 4 (b) 0 (c) 1 (d) 9

**-J.K.G. International school. Vijay Naga
Practice paper for Final Exam. – (2017-2018)**

CLASS IV

Time: 3 Hours

Science

M.M- 80

Q1. Multiple choice questions-

1x5=5

- a) Pollutants are _____ substance.
1) Clean 2) useful 3) harmful
- b) _____ pollution can affect our respiratory system.
1) Air 2) Water 3) Food
- c) The nearest star of the Earth _____
1) Pole Star 2) Sun 3) Neptune
- d) The Polar bear lives in _____
1) desert 2) plain 3) polar
- e) Most of the mammal breathe through _____ .
1) Lungs 2) gills 3) skin

Q2) Fill in the blanks

1x6=6

- a) Deep sleep of some animals during water is called _____
- b) Friction is _____ for writing on a paper.
- c) The smoke released by factories mainly contains _____
- d) The coldest planet of the solar system is _____
- e) Sea breeze usually occurs during _____
- f) A _____ is used to hold things.

Q3) Match the following-

1x5= 5

- | | |
|------------------------|----------|
| a) Push or Pull | humidity |
| b) Water vapour in air | lever |
| c) Burning of fuels | mammal |
| d) bat | force |
| e) simple machine | Smoke |

Q4) True or False against the statement-

1x5 = 5

- a) Burning of coal pollute the soil.
- b) The yellow substance present inside the egg is called embryo.
- c) Mercury is the smallest planet.
- d) Salamander and chameleon are amphibians.
- e) Hydroelectricity is produced through flowing water.

Q5) Name the following

1x5 = 5

- a) Inside the yolk, there is a growing baby called _____
- b) Animals that live both on land and in water are called _____
- c) Bottle opener is an example of _____

- d) A blanket of air around the earth is called _____
e) Cutting down of trees in large number is called _____

Q6) Answer following questions the.

1x8=8

- a) Give one example of water pollutant.
b) Name a waste that can be recycled.
c) Which planet of our solar system is known as red planet?
d) What is solar energy?
e) Name one camouflaging animal.
f) What do you mean by hibernation?
g) Define reproduction.
h) What is the purest form of water?

Q7) Answer any six questions.

2x6 = 12

- a) What is meant by evaporation?
b) What is Solar System?
c) Name two things that make the water dirty.
d) Name two things which does not decompose with time.
e) Why do porcupines have spines?
f) Who are terrestrial animals? Name one.
g) Give two examples of simple machine.

Q8) Answer the following questions

3x3= 9

- a) When is World environmental day celebrated and why?
b) Why does the Moon shine? Is it a luminous object?
c) What are the two ways that animals can reproduce? Give one example of each.

Q9) Answer any five questions -

5x4=20

- a) How does change in season takes place due to the movement of Earth?
b) How does the sun causes the wind to blow?
c) What is water energy? How it is related to hydroelectricity?
d) Lice live on the body of other animals and suck their blood.
(i) Name the animals that live on the other animal's body.
(ii) Is it good to be dependent on other people for your own work? Why/ Why not?
e) How do birds take care of their young ones?
f) Draw and name the four stages in the life cycle of butterfly.

Q10) General Awareness Questions

5x1=5

- a) Which is the only known warm blooded fish?
b) What is the name of traditional dress of Japan?
c) Which part of our body have the maximum number of bones?
d) Name world's smallest spacecraft launched by Indian rocket
e) Which country built World's largest solar park?

General Instructions:

- All the questions are compulsory to do.
- Do neat and clean work.
- Marks are allotted along with the questions.
- Maps to be attached along with answer sheet.

Q1.Choose the correct answer:-

(8)

- a.Crops which are harvested in the summer months are called
(i)Rabi crops (ii) Kharif crops (iii) food crops
- b. Which of the following is used for making aeroplanes?
(i)Iron (ii) Copper (iii) Aluminium
- c. Shah Jahan's father was
(i)Babur (ii) Akbar (iii) Jahangir
- d. Shivaji .was born here.
(i)Agra (ii) Shivneri (iii) Torna
- e. Roads made of long-lasting materials are called
(i)bridges (ii) kachcha roads (iii) pucca roads
- f. The government that deals with matters of national importance is the.
(i)central government (ii) state government (iii) panchayat
- g. The age at which you can start voting in elections.
(i)14 (ii) 16 (iii) 18
- h. To conduct elections, the country is divided into smaller areas called
(i)constituencies (ii) parties (iii) booths

Q2. Fill in the blanks:-

(8)

- (a) Cash crops are grown to help farmers earn_____.
- (b) The_____ in Agra is made of white marble.
- (c) Shivaji took the title of _____.
- (d) Earlier, animals were used for_____.
- (e) In gram panchayats, _____ of the seats are reserved for women.
- (f) Municipalities are formed in small_____.
- (g) _____ also take part in elections
- (h) _____ should be free and fair.

Q3. State True/ False:-

(8)

- (a) A food crop grown for selling, rather than for use by the person who grows it. (_____)
- (b) Shah Jahan was the Mughal ruler of Persia(_____)
- (c) Shah Jahan was succeeded by Jahangir.(_____)
- (d) Shivaji's father was Maharana Pratap (_____)
- (e) Shivaji captured the forts of Torna and Purandhar from the Bijapur army.(_____)
- (f) The Americans introduced the railways in India (_____)
- (g) The head of the panchayat is the mayor.(_____)
- (h) Panchayats run schools in villages.(_____).

Q4. Unscramble the letters to form the correct words:- (8)

- (a) Open something that is rolled tightly(NFUULR) _____
- (b) Shivaji fought bravely against this army(UGHMLA) _____
- (c) To be rude to somebody(SULTIN) _____
- (d) This can be send and received by post. (ETTERLS) _____
- (e) The local self –government bodies in big cities(NIMUCILAP CROOPRATOINS) _____
- (f) A council of five (ANCHAAPT) _____
- (g) Responsible for conducting elections(ETIONLEC NOMCSOMISI) _____
- (h) Voters go to this place to vote (LLINGOP OOTBH) _____

Q5. Match the following:- (8)

- | A | B |
|------------------------|----------------------------------|
| 1. Food and cash crops | (a) a foreign traveller to India |
| 2. Bernier | (b) interested in spice trade |
| 3. Portuguese traders | (c) large treasures |
| 4. Torna Fort | (d) municipality |
| 5. Jai Singh | (e) two types of crops |
| 6. Air transport | (f) municipal corporation |
| 7. Mayor | (g) longer distances |
| 8. Chairperson | (h) Aurangzeb's Rajput general |

Q6. Very short answer:- (10)

- a. Name any one product obtained from petroleum.
- b. Who became the Mughal emperor after Jahangir?
- c. When did Shah Jahan die?
- d. Name the two impressive buildings inside the Red Fort.
- e. Whose army adopted the guerrilla warfare?
- f. Who sent a large army under Afzal Khan to defeat Shivaji?
- g. Name the first woman Sarpanch of Soda village, Rajasthan.
- h. Name any one task done by the village panchayat?
- i. Name the three levels of government in India.
- j. Which party forms the opposition?

Q7. Answer the following questions briefly:- (12)

- a. Why is India called an agricultural country?
- b. What are highways? Give an example.
- c. What is the meaning of local self-government?
- d. What are political parties?

Q8. Value based Question :- (3)

Local self-government shows us that by working together we can help our country to develop and we can make our lives better. Write any three ways through which we can help the local governments perform their work better.

Q9. Draw the following:- (4)

- a. Any means of land transport.
- b. Electronic voting machine.

Q10. In a political map of India, show the following food crops : (6)

- a. Rice in any three states
- b. wheat in any three states

Q11. General Awareness: (5)

- a. In which city are the Wimbledon games held?
- b. Which Indian freedom fighter created the slogan 'Dilli Chalo'?
- c. Name the wall that divided East and West Germany.
- d. Which place is called the "City of mosques and muslin"?
- e. Name one of the oldest cities of India with many ghats.